




## ODD AND EVEN NUMBERS USING MODELS 6


- For each question, write down the number of objects and highlight whether the number is even or odd.




14 birds.  
This number is  
even / odd.




\_\_\_\_ stars.  
This number is  
even / odd.



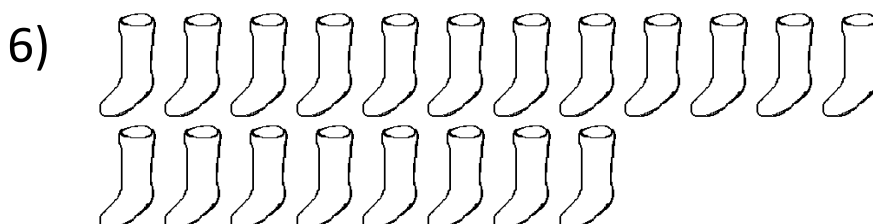
\_\_\_\_ people.  
This number is  
even / odd.



\_\_\_\_ cars.  
This number is  
even / odd.




\_\_\_\_ snails.  
This number is  
even / odd.



\_\_\_\_ socks.  
This number is  
even / odd.




# ODD AND EVEN NUMBERS USING MODELS 6 ANSWERS




14 birds.  
This number is **even** / odd.




15 stars.  
This number is even / **odd**.



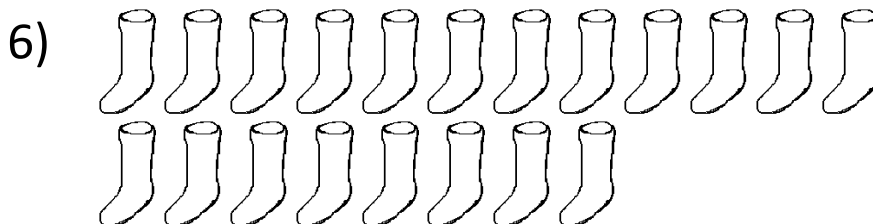
11 people.  
This number is even / **odd**.



12 cars.  
This number is **even** / odd.



17 snails.  
This number is even / **odd**.



20 socks.  
This number is **even** / odd.

