



Name \_\_\_\_\_

Date \_\_\_\_\_



## ODD AND EVEN NUMBERS TO 20 SHEET 3

Shade all the **even** numbers to find out which route the mouse takes to get the cheese.

	11	9	17	5	13	3	7
18	4	15	13	7	1	19	5
17	12	5	4	20	12	8	9
13	8	16	12	19	11	14	13
1	9	15	3	17	18	6	7
7	15	12	16	2	10	3	19
14	6	20	1	9	13	11	5
8	13	7	17	5	14	8	12
4	10	18	19	11	10	7	4
15	9	6	20	2	16	3	




Name

Date



## ODD AND EVEN NUMBERS TO 20 SHEET 3 ANSWERS

Shade all the **even** numbers to find out which route the mouse takes to get the cheese.

	11	9	17	5	13	3	7
18	4	15	13	7	1	19	5
17	12	5	4	20	12	8	9
13	8	16	12	19	11	14	13
1	9	15	3	17	18	6	7
7	15	12	16	2	10	3	19
14	6	20	1	9	13	11	5
8	13	7	17	5	14	8	12
4	10	18	19	11	10	7	4
15	9	6	20	2	16	3	