



Name

Date



## EVEN AND ODD NUMBERS TO 100 SHEET 4

Shade all the **even** numbers to find out which route the mouse takes to get the cheese.

	61	39	32	26	40	18	27
94	47	35	12	63	81	24	32
38	44	75	70	56	47	29	62
93	6	87	41	0	25	74	28
69	14	53	46	72	49	60	23
16	38	51	4	43	77	82	30
82	35	7	10	39	81	27	54
96	34	35	16	88	29	20	56
17	70	23	19	54	91	22	5
63	24	42	86	34	27	8	




Name

Date



## EVEN AND ODD NUMBERS TO 100 SHEET 4 ANSWERS

Shade all the **even** numbers to find out which route the mouse takes to get the cheese.

	61	39	32	26	40	18	27
94	47	35	12	63	81	24	32
38	44	75	70	56	47	29	62
93	6	87	41	0	25	74	28
69	14	53	46	72	49	60	23
16	38	51	4	43	77	82	30
82	35	7	10	39	81	27	54
96	34	35	16	88	29	20	56
17	70	23	19	54	91	22	5
63	24	42	86	34	27	8	